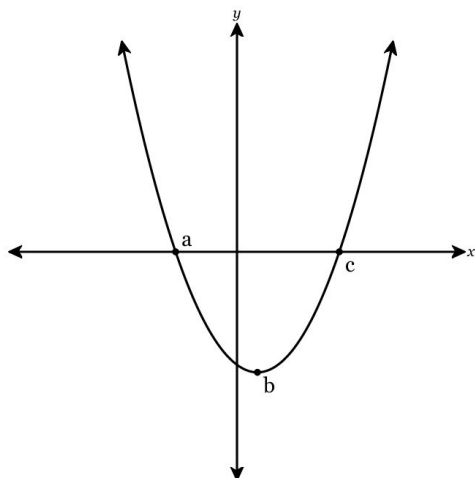
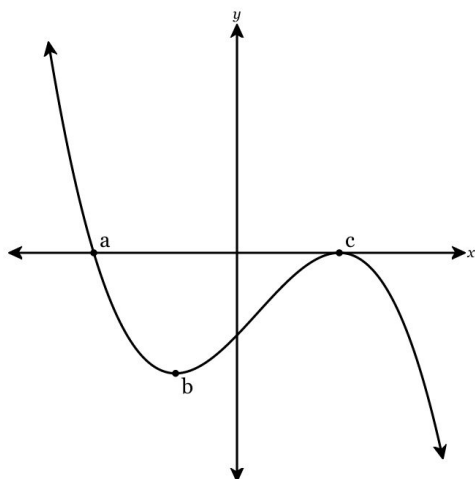


1. The function  $f(x)$  is graphed below. What is true about the graph on the interval from  $x = c$  to  $x = \infty$ ?



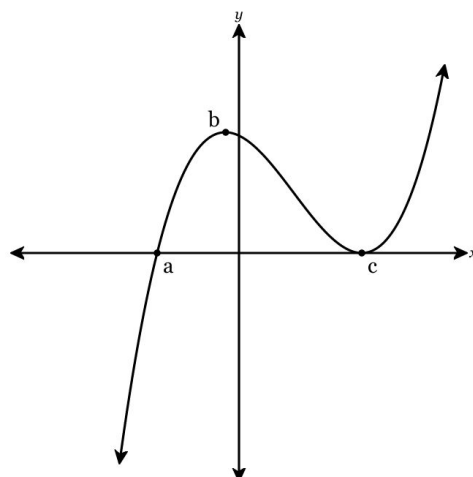
- A. It is positive and increasing
- B. It is positive and decreasing
- C. It is negative and increasing
- D. It is negative and decreasing

2. The function  $f(x)$  is graphed below. What is true about the graph on the interval from point  $b$  to point  $c$ ?



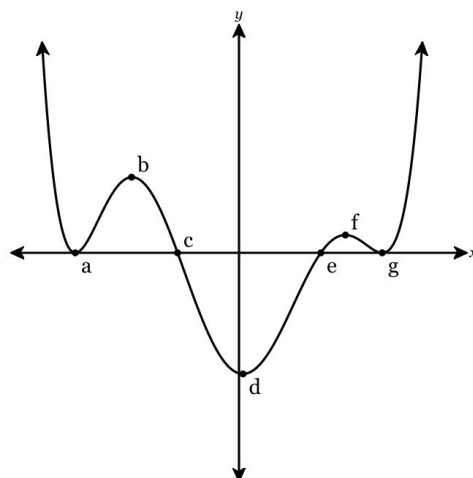
- A. It is positive and increasing
- B. It is positive and decreasing
- C. It is negative and increasing
- D. It is negative and decreasing

3. The function  $f(x)$  is graphed below. What is true about the graph on the interval from  $x = -\infty$  to  $x = a$ ?



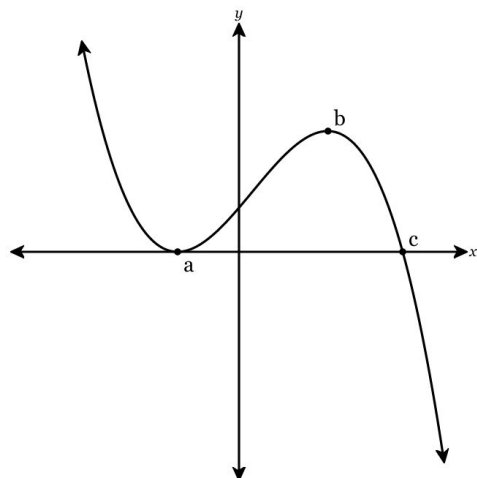
- A. It is positive and increasing
- B. It is positive and decreasing
- C. It is negative and increasing
- D. It is negative and decreasing

4. The function  $f(x)$  is graphed below. What is true about the graph on the interval from  $x = g$  to  $x = \infty$ ?



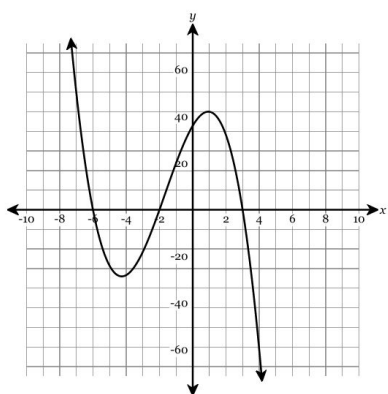
- A. It is positive and increasing
- B. It is positive and decreasing
- C. It is negative and increasing
- D. It is negative and decreasing

5. The function  $f(x)$  is graphed below. What is true about the graph on the interval from point  $a$  to point  $b$ ?



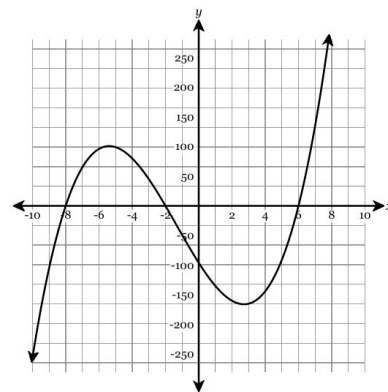
- A. It is positive and increasing
- B. It is positive and decreasing
- C. It is negative and increasing
- D. It is negative and decreasing

6. The graph of  $y = f(x)$  is graphed below. What is the end behavior of  $f(x)$ ?



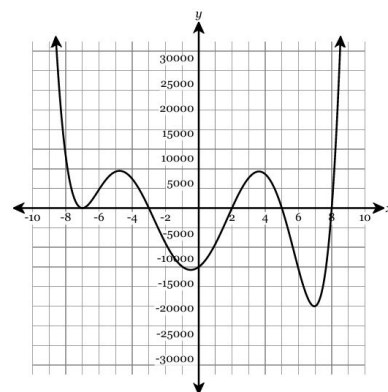
- A. as  $x \rightarrow -\infty, f(x) \rightarrow \infty$  and as  $x \rightarrow \infty, f(x) \rightarrow \infty$
- B. as  $x \rightarrow -\infty, f(x) \rightarrow -\infty$  and as  $x \rightarrow \infty, f(x) \rightarrow \infty$
- C. as  $x \rightarrow -\infty, f(x) \rightarrow -\infty$  and as  $x \rightarrow \infty, f(x) \rightarrow -\infty$
- D. as  $x \rightarrow -\infty, f(x) \rightarrow \infty$  and as  $x \rightarrow \infty, f(x) \rightarrow -\infty$

7. The graph of  $y = f(x)$  is graphed below. What is the end behavior of  $f(x)$ ?



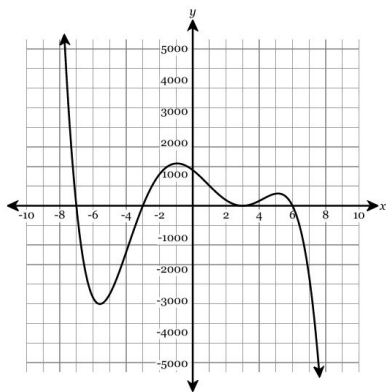
- A. as  $x \rightarrow -\infty, y \rightarrow \infty$  and as  $x \rightarrow \infty, y \rightarrow \infty$
- B. as  $x \rightarrow -\infty, y \rightarrow -\infty$  and as  $x \rightarrow \infty, y \rightarrow -\infty$
- C. as  $x \rightarrow -\infty, y \rightarrow -\infty$  and as  $x \rightarrow \infty, y \rightarrow \infty$
- D. as  $x \rightarrow -\infty, y \rightarrow \infty$  and as  $x \rightarrow \infty, y \rightarrow -\infty$

8. The graph of  $y = f(x)$  is graphed below. What is the end behavior of  $f(x)$ ?



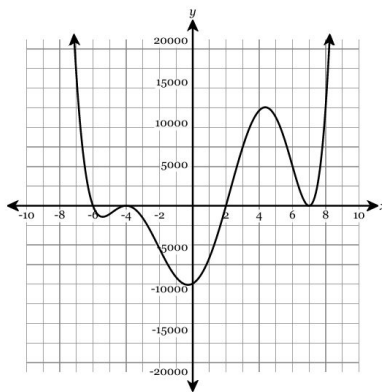
- A. as  $x \rightarrow -\infty, f(x) \rightarrow \infty$  and as  $x \rightarrow \infty, f(x) \rightarrow -\infty$
- B. as  $x \rightarrow -\infty, f(x) \rightarrow -\infty$  and as  $x \rightarrow \infty, f(x) \rightarrow \infty$
- C. as  $x \rightarrow -\infty, f(x) \rightarrow -\infty$  and as  $x \rightarrow \infty, f(x) \rightarrow -\infty$
- D. as  $x \rightarrow -\infty, f(x) \rightarrow \infty$  and as  $x \rightarrow \infty, f(x) \rightarrow \infty$

9. The graph of  $y = f(x)$  is graphed below. What is the end behavior of  $f(x)$ ?



- A. as  $x \rightarrow \infty, f(x) \rightarrow -\infty$  and as  $x \rightarrow -\infty, f(x) \rightarrow \infty$
- B. as  $x \rightarrow \infty, f(x) \rightarrow \infty$  and as  $x \rightarrow -\infty, f(x) \rightarrow -\infty$
- C. as  $x \rightarrow \infty, f(x) \rightarrow \infty$  and as  $x \rightarrow -\infty, f(x) \rightarrow \infty$
- D. as  $x \rightarrow \infty, f(x) \rightarrow -\infty$  and as  $x \rightarrow -\infty, f(x) \rightarrow -\infty$

10. The graph of  $y = f(x)$  is graphed below. What is the end behavior of  $f(x)$ ?



- A. as  $x \rightarrow -\infty, f(x) \rightarrow \infty$  and as  $x \rightarrow \infty, f(x) \rightarrow -\infty$
- B. as  $x \rightarrow -\infty, f(x) \rightarrow -\infty$  and as  $x \rightarrow \infty, f(x) \rightarrow \infty$
- C. as  $x \rightarrow -\infty, f(x) \rightarrow \infty$  and as  $x \rightarrow \infty, f(x) \rightarrow \infty$
- D. as  $x \rightarrow -\infty, f(x) \rightarrow -\infty$  and as  $x \rightarrow \infty, f(x) \rightarrow -\infty$



Scan the QR code or visit  
[deltamath.com/qr/E7J73-K49RQ](https://deltamath.com/qr/E7J73-K49RQ)  
 to view full solutions.